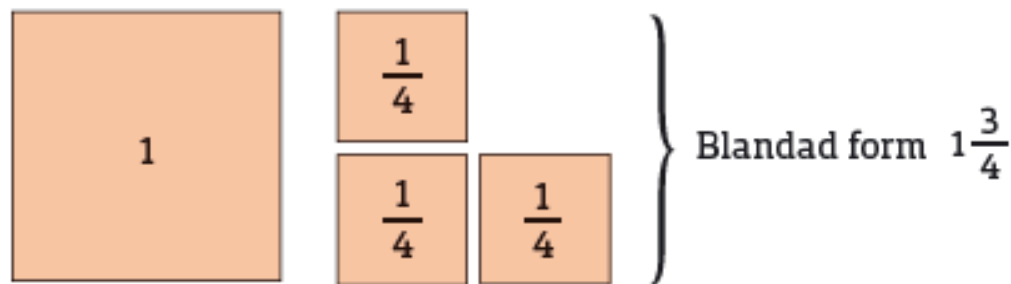
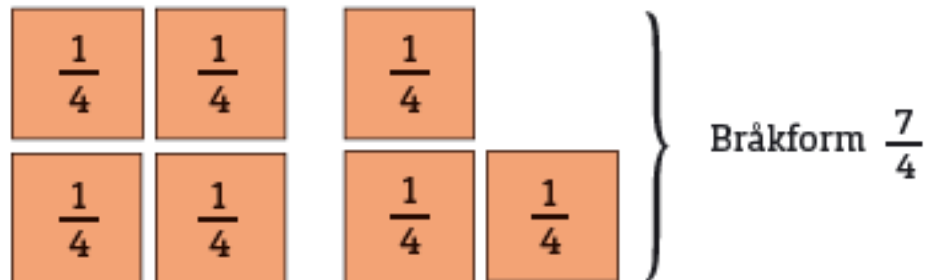


X 1.5

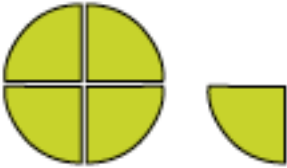
Räkna med bråk

Bråkform och blandad form



Bråkform

Blandad form



$$\frac{5}{4}$$

$$1\frac{1}{4}$$



$$\frac{5}{2}$$

$$2\frac{1}{2}$$



$$\frac{7}{3}$$

$$2\frac{1}{3}$$

Skriv i blandad form

$$\frac{9}{4} = 2\frac{1}{4}$$

$$\frac{13}{7} = 1\frac{6}{7}$$

$$\frac{17}{5} = 3\frac{2}{5}$$

$$\frac{38}{9} = 4\frac{2}{9}$$

Skriv i bråkform

$$1\frac{3}{8} = \frac{11}{8}$$

$$3\frac{5}{6} = \frac{23}{6}$$

$$2\frac{2}{3} = \frac{8}{3}$$

$$5\frac{7}{10} = \frac{57}{10}$$